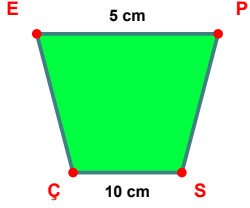
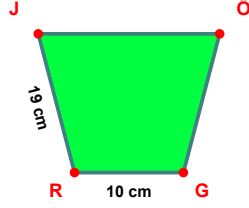


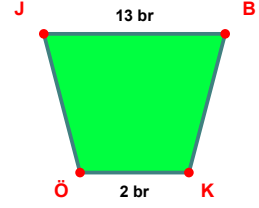
**SORU:** Aşağıdaki şekillerde verilen, kenar uzunlukları farklarını bulunuz.



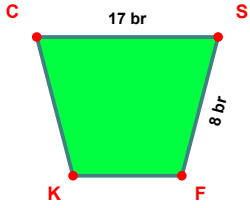
$$|SÇ| - |EP| = \dots\dots\dots$$



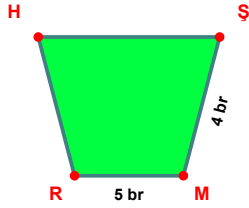
$$|RJ| - |GR| = \dots\dots\dots$$



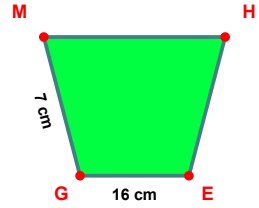
$$|JB| - |KÖ| = \dots\dots\dots$$



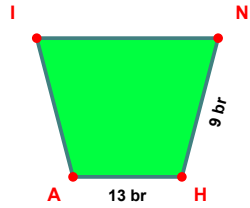
$$|CS| - |SF| = \dots\dots\dots$$



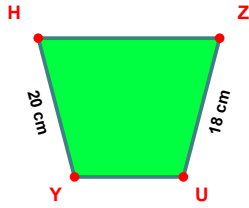
$$|MR| - |ŞM| = \dots\dots\dots$$



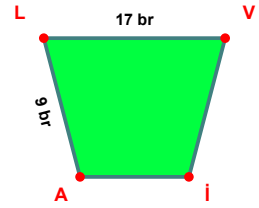
$$|EG| - |GM| = \dots\dots\dots$$



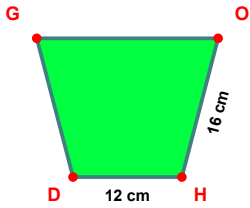
$$|HA| - |NH| = \dots\dots\dots$$



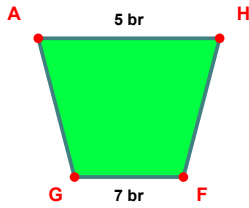
$$|YH| - |ZU| = \dots\dots\dots$$



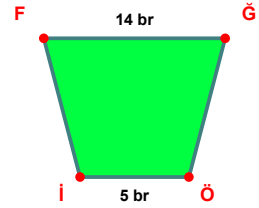
$$|LV| - |AL| = \dots\dots\dots$$



$$|OH| - |HD| = \dots\dots\dots$$

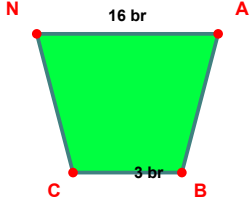


$$|FG| - |AH| = \dots\dots\dots$$

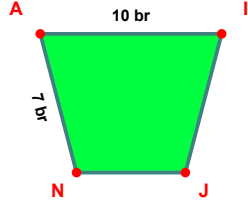


$$|FĞ| - |Öİ| = \dots\dots\dots$$

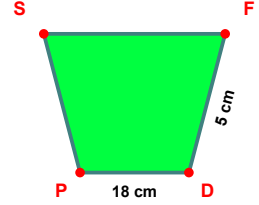
**SORU:** Aşağıdaki şekillerde verilen, kenar uzunlukları farklarını bulunuz.



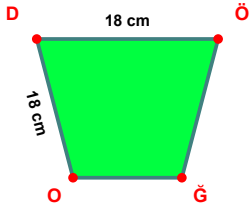
$|NA| - |BC| = \dots\dots\dots$



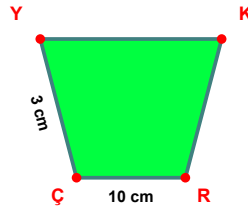
$|AI| - |NA| = \dots\dots\dots$



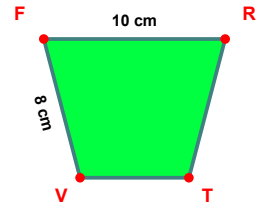
$|DP| - |FD| = \dots\dots\dots$



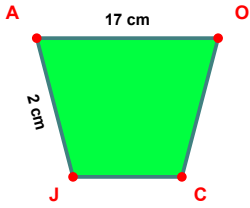
$|OD| - |DÖ| = \dots\dots\dots$



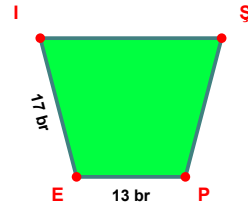
$|RC| - |CY| = \dots\dots\dots$



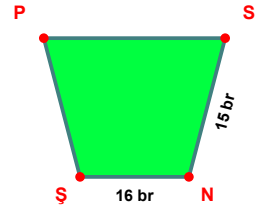
$|FR| - |VF| = \dots\dots\dots$



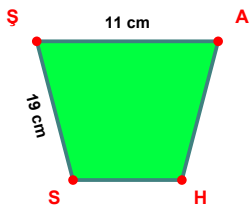
$|AO| - |JA| = \dots\dots\dots$



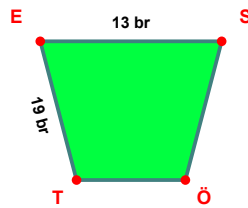
$|EI| - |PE| = \dots\dots\dots$



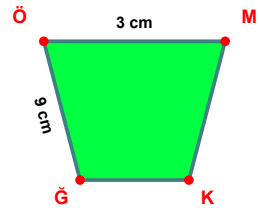
$|NS| - |SN| = \dots\dots\dots$



$|SS| - |ŞA| = \dots\dots\dots$



$|TE| - |ES| = \dots\dots\dots$



$|ĞÖ| - |ÖM| = \dots\dots\dots$

SÜREÇ ODAKLI DEĞERLENDİRME ÖLÇEĞİ

Doğru Sayısı: ..... / 24

Öğretmen ilgili kutucuğu işaretler.

Geliştirilmeli (0-8)

İyi (9-14)

Çok İyi (15-20)

Mükemmel (21-24)

☐☐☐☐

Hazırlayan: .....

Bu bölüme sınıfınızın ilgili kazanıma yönelik genel durumuna ilişkin gözlem ve izlenimlerinizi, öğrencilerinizin bu kazanımla ilgili öğrenme eksikliklerini ve bu eksikliklerin giderilmesi amacıyla yaptığınız/yapmayı planladığınız faaliyetleri not edebilirsiniz.

No	Adı - Soyadı	Toplam Puan	Değerlendirme
1			
2			
3			
4			
5			
6			
7			
8			
9			
10			
11			
12			
13			
14			
15			
16			
17			
18			
19			
20			
21			
22			
23			
24			
25			
26			
27			
28			
29			
30			
31			
32			
33			
34			
35			

Hazırlayan: .....